




Cross out 1 bin. Write how many are left. _____



Cross out 5 pots. Write how many are left. _____




Cross out 6 cots. Write how many are left. _____



Name _____

Date _____

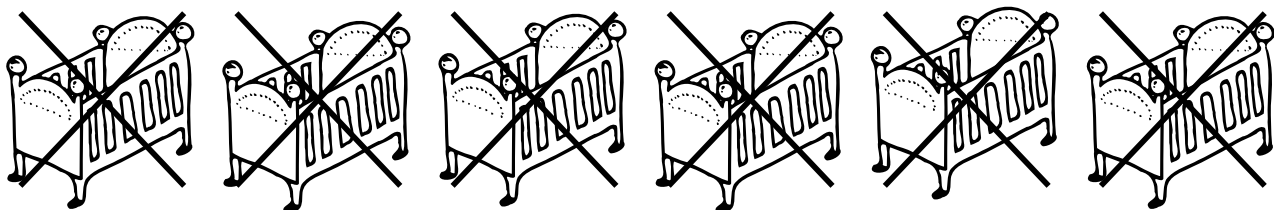
Cross out 1 bin. Write how many are left. 0



Cross out 5 pots. Write how many are left. 0




Cross out 6 cots. Write how many are left. 0



Cross out 3 nuns. Write how many are left. _____



Cross out 4 foxes. Write how many are left. _____




Cross out 5 jars. Write how many are left. _____




Name _____

Date _____

Cross out 3 nuns. Write how many are left. 1




Cross out 4 foxes. Write how many are left. 1



Cross out 5 jars. Write how many are left. 1




Cross out 6 rats. Write how many are left. _____



Cross out 1 cup. Write how many are left. _____




Cross out 4 faces. Write how many are left. _____



Name _____

Date _____


Cross out 6 rats. Write how many are left. 0




Cross out 1 cup. Write how many are left. 0



Cross out 4 faces. Write how many are left. 0



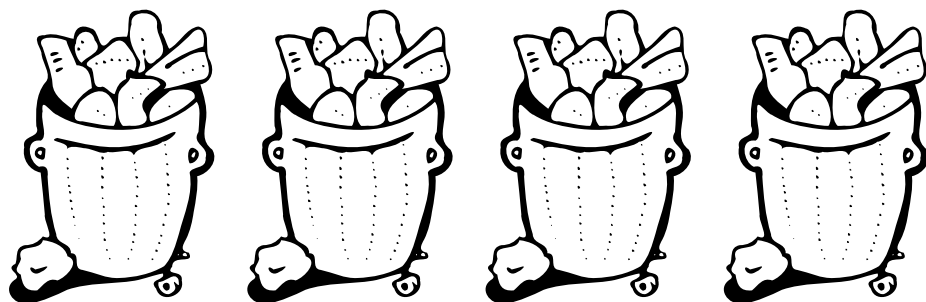
Cross out 2 cogs. Write how many are left. _____



Cross out 6 tags. Write how many are left. _____




Cross out 4 bins. Write how many are left. _____



Name _____

Date _____

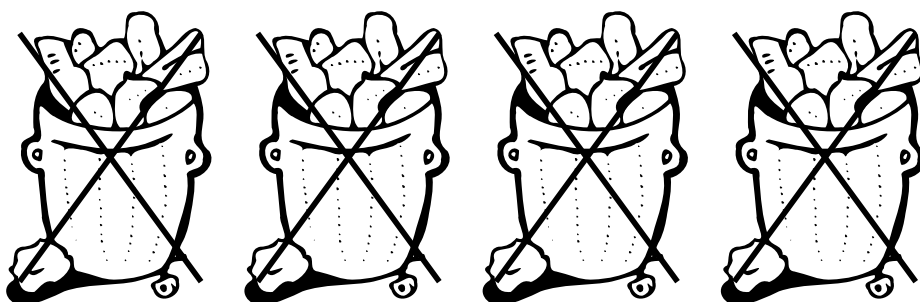
Cross out 2 cogs. Write how many are left. 4




Cross out 6 tags. Write how many are left. 0




Cross out 4 bins. Write how many are left. 0



Cross out 4 tubs. Write how many are left. _____



Cross out 3 bibs. Write how many are left. _____




Cross out 5 taps. Write how many are left. _____



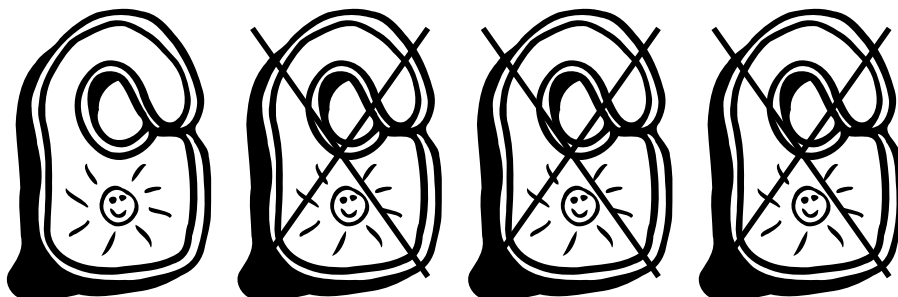
Name _____

Date _____

Cross out 4 tubs. Write how many are left. 0




Cross out 3 bibs. Write how many are left. 1




Cross out 5 taps. Write how many are left. 0



Cross out 4 men. Write how many are left. _____



Cross out 2 bins. Write how many are left. _____




Cross out 1 sum. Write how many are left. _____

$$\begin{array}{r} 3 \\ 2 + \\ \hline 5 \end{array} \quad \begin{array}{r} 3 \\ 2 + \\ \hline 5 \end{array}$$

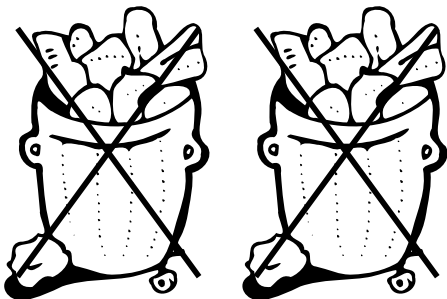
Name _____

Date _____

Cross out 4 men. Write how many are left. 0



Cross out 2 bins. Write how many are left. 0




Cross out 1 sum. Write how many are left. 1


$$\begin{array}{r} 3 \\ 2 + \\ \hline 5 \\ \hline \end{array} \quad \begin{array}{r} \cancel{3} \\ \cancel{2} + \\ \hline \cancel{5} \\ \hline \end{array}$$



Cross out 1 ram. Write how many are left. _____



Cross out 5 caps. Write how many are left. _____



Cross out 3 sums. Write how many are left. _____

$$\begin{array}{r} 3 \\ 2 + \\ \hline 5 \\ \hline \end{array}$$


$$\begin{array}{r} 3 \\ 2 + \\ \hline 5 \\ \hline \end{array}$$

$$\begin{array}{r} 3 \\ 2 + \\ \hline 5 \\ \hline \end{array}$$

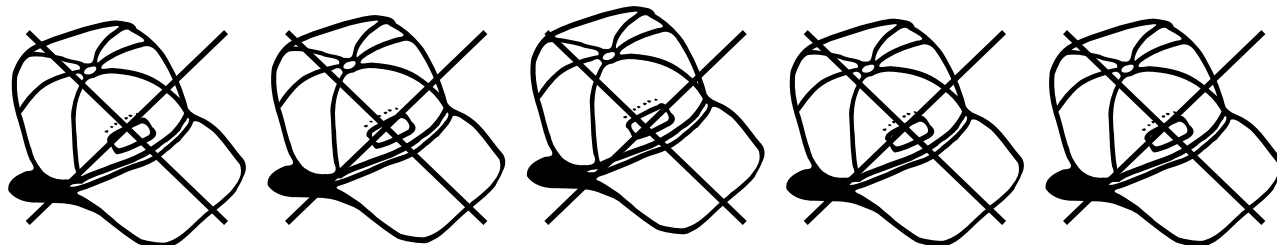
Name _____

Date _____


Cross out 1 ram. Write how many are left. 2



Cross out 5 caps. Write how many are left. 0




Cross out 3 sums. Write how many are left. 0



Cross out 1 nun. Write how many are left. _____



Cross out 2 buses. Write how many are left. _____




Cross out 5 huts. Write how many are left. _____




Name _____

Date _____

Cross out 1 nun. Write how many are left. 0




Cross out 2 buses. Write how many are left. 3



Cross out 5 huts. Write how many are left. 0




Cross out 4 bats. Write how many are left. _____



Cross out 1 zip. Write how many are left. _____




Cross out 2 cogs. Write how many are left. _____




Name _____

Date _____


Cross out 4 bats. Write how many are left. 0



Cross out 1 zip. Write how many are left. 1




Cross out 2 cogs. Write how many are left. 1

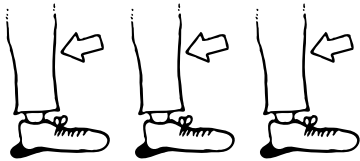


1 less


Cross out 1 ram. Write how many are left. _____




Cross out 1 leg. Write how many are left. _____




Cross out 1 pig. Write how many are left. _____



Cross out 1 fox. Write how many are left. _____



Cross out 1 tin. Write how many are left. _____




Name _____

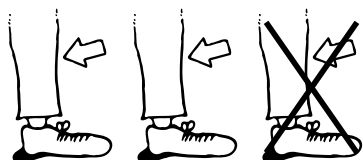
Date _____

1 less


Cross out 1 ram. Write how many are left. 1




Cross out 1 leg. Write how many are left. 2




Cross out 1 pig. Write how many are left. 0



Cross out 1 fox. Write how many are left. 3



Cross out 1 tin. Write how many are left. 4




1 less

Cross out 1 tail. Write how many are left. _____




Cross out 1 tap. Write how many are left. _____




Cross out 1 nun. Write how many are left. _____



Cross out 1 bin. Write how many are left. _____



Cross out 1 map. Write how many are left. _____



Name _____


Date _____

1 less

Cross out 1 tail. Write how many are left. 0




Cross out 1 tap. Write how many are left. 3




Cross out 1 nun. Write how many are left. 4



Cross out 1 bin. Write how many are left. 2




Cross out 1 map. Write how many are left. 1




1 less


Cross out 1 cherry. Write how many are left. _____



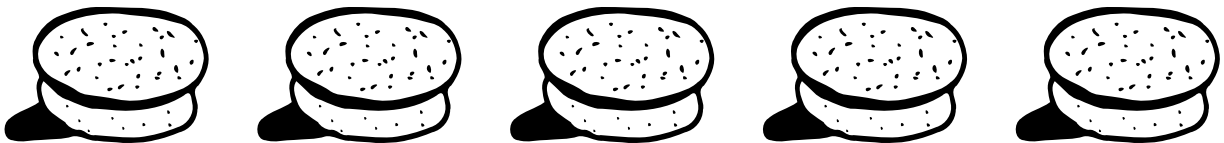
Cross out 1 tin. Write how many are left. _____



Cross out 1 mop. Write how many are left. _____



Cross out 1 bun. Write how many are left. _____



Cross out 1 witch. Write how many are left. _____



Name _____


Date _____

1 less


Cross out 1 cherry. Write how many are left. 1




Cross out 1 tin. Write how many are left. 2



Cross out 1 mop. Write how many are left. 3



Cross out 1 bun. Write how many are left. 4

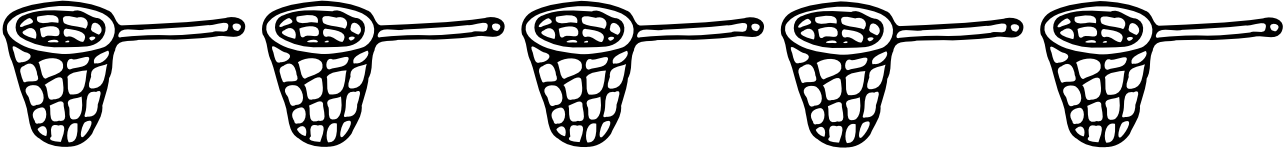


Cross out 1 witch. Write how many are left. 0




1 less


Cross out 1 net. Write how many are left. _____




Cross out 1 bus. Write how many are left. _____




Cross out 1 watch. Write how many are left. _____



Cross out 1 mat. Write how many are left. _____



Cross out 1 tin. Write how many are left. _____




Name _____


Date _____

1 less


Cross out 1 net. Write how many are left. 4




Cross out 1 bus. Write how many are left. 0




Cross out 1 watch. Write how many are left. 3



Cross out 1 mat. Write how many are left. 1

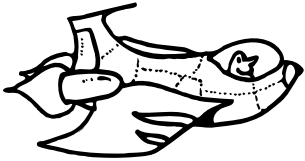


Cross out 1 tin. Write how many are left. 2



1 more

Draw 1 more jet. Write how many altogether. _____




Draw 1 more top. Write how many altogether. _____



Draw 1 more zip. Write how many altogether. _____



Draw 1 more rat. Write how many altogether. _____



Draw 1 more hut. Write how many altogether. _____




Name _____

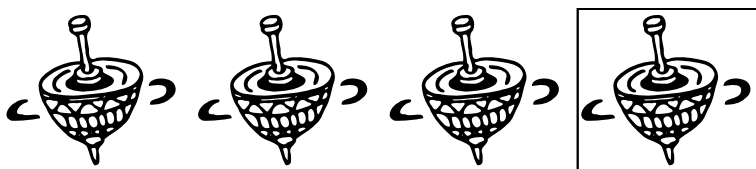
Date _____

1 more

Draw 1 more jet. Write how many altogether. 2




Draw 1 more top. Write how many altogether. 4



Draw 1 more zip. Write how many altogether. 5



Draw 1 more rat. Write how many altogether. 3



Draw 1 more hut. Write how many altogether. 4




1 more


Draw 1 more cap. Write how many altogether. _____




Draw 1 more face. Write how many altogether. _____




Draw 1 more dog. Write how many altogether. _____



Draw 1 more tub. Write how many altogether. _____



Draw 1 more pad. Write how many altogether. _____

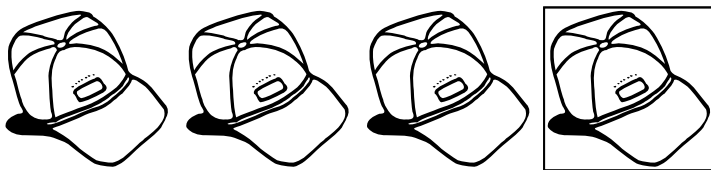


Name _____

Date _____

1 more

Draw 1 more cap. Write how many altogether. 4




Draw 1 more face. Write how many altogether. 3



Draw 1 more dog. Write how many altogether. 5



Draw 1 more tub. Write how many altogether. 2



Draw 1 more pad. Write how many altogether. 3




1 more

Draw 1 more top. Write how many altogether. _____



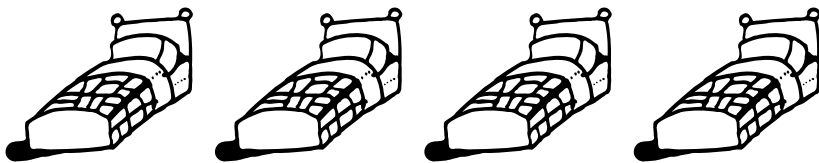
Draw 1 more bat. Write how many altogether. _____




Draw 1 more tail. Write how many altogether. _____



Draw 1 more bed. Write how many altogether. _____



Draw 1 more cog. Write how many altogether. _____

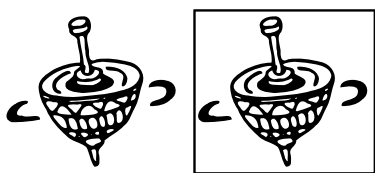


Name _____

Date _____

1 more


Draw 1 more top. Write how many altogether. 2




Draw 1 more bat. Write how many altogether. 3




Draw 1 more tail. Write how many altogether. 4



Draw 1 more bed. Write how many altogether. 5




Draw 1 more cog. Write how many altogether. 2




1 more


Draw 1 more bib. Write how many altogether. _____



Draw 1 more can. Write how many altogether. _____




Draw 1 more tail. Write how many altogether. _____



Draw 1 more zip. Write how many altogether. _____



Draw 1 more tub. Write how many altogether. _____




Name _____


Date _____

1 more

Draw 1 more bib. Write how many altogether. 4




Draw 1 more can. Write how many altogether. 3




Draw 1 more tail. Write how many altogether. 5



Draw 1 more zip. Write how many altogether. 2



Draw 1 more tub. Write how many altogether. 3




1, 2 and 3 less


Cross out 1 mug. Write how many are left. _____



Cross out 2 webs. Write how many are left. _____



Cross out 3 cogs. Write how many are left. _____



Cross out 3 tops. Write how many are left. _____



Cross out 1 face. Write how many are left. _____



Name _____


Date _____

1, 2 and 3 less


Cross out 1 mug. Write how many are left. 2




Cross out 2 webs. Write how many are left. 2



Cross out 3 cogs. Write how many are left. 2



Cross out 3 tops. Write how many are left. 0




Cross out 1 face. Write how many are left. 3




1, 2 and 3 less

Cross out 3 mats. Write how many are left. _____




Cross out 1 pen. Write how many are left. _____



Cross out 2 rams. Write how many are left. _____



Cross out 1 sun. Write how many are left. _____



Cross out 2 cats. Write how many are left. _____




Name _____


Date _____

1, 2 and 3 less


Cross out 3 mats. Write how many are left. 1




Cross out 1 pen. Write how many are left. 4



Cross out 2 rams. Write how many are left. 1



Cross out 1 sun. Write how many are left. 3




Cross out 2 cats. Write how many are left. 3




1, 2 and 3 more


Draw 2 more men. Write how many altogether. _____




Draw 3 more torches. Write how many altogether. _____



Draw 1 more hen. Write how many altogether. _____



Draw 1 more pig. Write how many altogether. _____



Draw 2 more maps. Write how many altogether. _____




Name _____

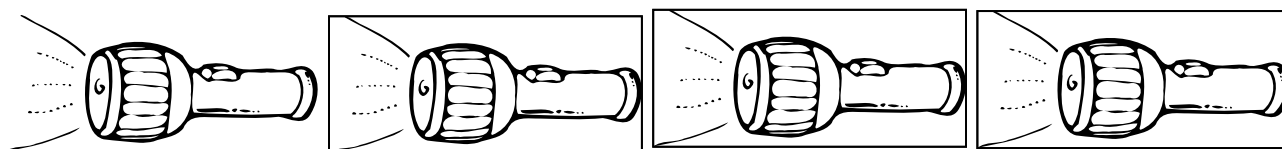
Date _____

1, 2 and 3 more


Draw 2 more men. Write how many altogether. 4




Draw 3 more torches. Write how many altogether. 4



Draw 1 more hen. Write how many altogether. 2



Draw 1 more pig. Write how many altogether. 3



Draw 2 more maps. Write how many altogether. 3

